

Circle the groups and fill in the blanks.



_____ groups of 3 airplanes equals _____ airplanes



_____ x 3 = _____



_____ groups of _____ envelopes equals _____ envelopes



_____ x _____ = _____



_____ x _____ = _____

_____ groups of _____ pencils equals _____ pencils



_____ groups of _____ phones equals _____ phones



_____ x _____ = _____




_____ groups of _____ smilies equals _____ smilies




_____ x _____ = _____


Circle the groups and fill in the blanks.




_____ groups of _____ flags equals _____ flags
_____ x _____ = _____




_____ groups of _____ flakes equals _____ flakes
_____ x _____ = _____



_____ groups of _____ Frosties equals _____ Frosties
_____ x _____ = _____



_____ groups of _____ suns equals _____ suns
_____ x _____ = _____



_____ groups of _____ bells equals _____ bells
_____ x _____ = _____